

# Class 4 Math

## Telling Time – am / pm

- a.m. for time after 12 midnight and before 12 noon
- p.m. for time after 12 noon and before 12 midnight
- a.m. - ante meridian and p.m. - post meridian

### A. Give the time. Use a.m. or p.m.



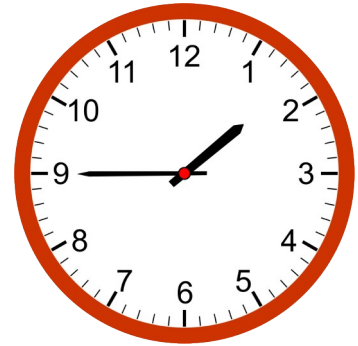
Wake up time

\_\_\_\_\_




School time

\_\_\_\_\_



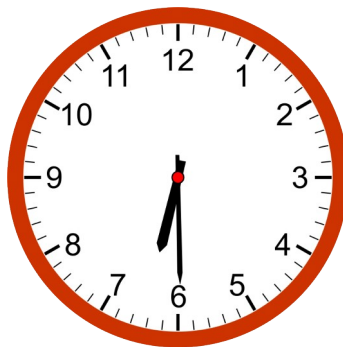
Lunch time

\_\_\_\_\_




Dinner time

\_\_\_\_\_



Home work time

\_\_\_\_\_



Midnight

\_\_\_\_\_

## B. Fill in the blanks. Daylight or Darkness

- |                     |                     |
|---------------------|---------------------|
| a. 7:15 a.m. _____  | f. 5:15 p.m. _____  |
| b. 12:20 p.m. _____ | g. 12:50 a.m. _____ |
| c. 2:45 a.m. _____  | h. 8:30 p.m. _____  |
| d. 6:30 p.m. _____  | i. 4:30 a.m. _____  |
| e. 1:20 p.m. _____  | j. 2:30 p.m. _____  |

## C. Tell the time? Using a.m. or p.m.

- |                                   |                                   |
|-----------------------------------|-----------------------------------|
| a. 2 hours after 10:15 a.m. _____ | f. 1 hour before 12:15 p.m. _____ |
| b. 4 hour after 8:30 p.m. _____   | g. 3 hour after 10:50 a.m. _____  |
| c. 2 hour after 6:30 a.m. _____   | h. 4 hour after 9:50 p.m. _____   |
| d. 6 hour after 10:30 p.m. _____  | i. 1 hour after 11:30 p.m. _____  |
| e. 1 hour after 4:30 p.m. _____   | j. 3 hour before 2:30 p.m. _____  |

## Answers

A.

6:30 a.m.

7:30 a.m.

1:45 p.m.

8:00 p.m.

6:30 p.m.

3:00 a.m.

B.

a. daylight

f. daylight

b. daylight

g. darkness

c. darkness

h. darkness

d. darkness

i. darkness

e. daylight

j. daylight

C.

a. 12:15 p.m.

f. 11:15 a.m.

b. 12:30 a.m.

g. 01:50 p.m.

c. 08:30 a.m.

h. 01:50 a.m.

d. 04:30 a.m.

i. 12:30 a.m.

e. 05:30 p.m.

j. 11:30 a.m.