

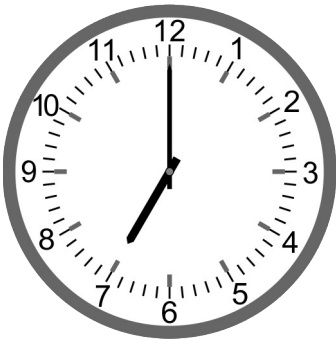
# Class 4 Math

## Telling Time 24 hours

- In 24 hours clock, we use 13:00, 14:00, so on after 12:00 noon
- We use time before 12 noon as it is without a.m. and after 12 noon we add 12 to the time and remove p.m.

e.g. 2:30 p.m. = 12:00 + 2:30 = 14:30 hours

### A. Give the time. 24 hours format




School time

\_\_\_\_\_



Home work time

\_\_\_\_\_




Dinner time

\_\_\_\_\_



Lunch time

\_\_\_\_\_



Wake up time

\_\_\_\_\_



Playing time

\_\_\_\_\_

**B. Fill in the blanks. 24 hours**

- |               |       |               |       |
|---------------|-------|---------------|-------|
| a. 6:30 a.m.  | _____ | f. 3:45 p.m.  | _____ |
| b. 2:20 p.m.  | _____ | g. 10:50 a.m. | _____ |
| c. 5:25 a.m.  | _____ | h. 7:30 p.m.  | _____ |
| d. 6:50 p.m.  | _____ | i. 4:30 a.m.  | _____ |
| e. 11:30 a.m. | _____ | j. 8:30 p.m.  | _____ |

**C. Match the following.**

- |               |                |
|---------------|----------------|
| a. 11:45 a.m. | 1. 05:30 hours |
| b. 7:00 p.m.  | 2. 20:15 hours |
| c. 5:30 a.m.  | 3. 11:45 hours |
| d. 12:50 p.m. | 4. 10:30 hours |
| e. 8:15 p.m.  | 5. 12:50 hours |
| f. 6:20 a.m.  | 6. 03:00 hours |
| g. 1:15 p.m.  | 7. 19:00 hours |
| h. 10:30 a.m. | 8. 14:35 hours |
| i. 3:00 a.m.  | 9. 13:15 hours |
| j. 2:35 p.m.  | 10. 6:20 hours |

## Answers

A.

07:00 hours	18:30 hours	19:40 hours
13:55 hours	06:00 hours	16:00 hours

B.

a. 06:30 hours	f. 15:45 hours
b. 14:20 hours	g. 10:50 hours
c. 05:25 hours	h. 19:30 hours
d. 18:50 hours	i. 04:30 hours
e. 11:30 hours	j. 20:30 hours

C.

a. - 3
b. - 7
c. - 1
d. - 5
e. - 2
f. - 10
g. - 9
h. - 4
i. - 6
j. - 8